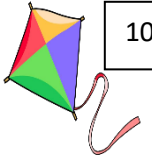


Blue group money word problems




7p



10p

How much will I spend if I buy a pair of sunglasses and a kite?




9 p




18p

What is the total cost of the toy car and an ice cream?

Sam wants to buy bananas and a drink from the shop. How much will he spend in total?



15p



6p



17p



12p

How much will I spend if I buy a teddy and a pair of socks?

1. Apples cost 14p each. How much would I spend if I bought 2 apples?
2. How much altogether is 5p, 10p and 2p?
3. Mum buys Joe a drink for 19p and a piece of fruit for 13p. What did she spend altogether?
4. John bought 3 brownies at a bake sale. If each brownie cost 9p, how much did he spend altogether?
5. Grace buys a pencil for 17p and a notebook for 15p. what was the total cost?
6. Sally has 30p. She wants to buy a ball for 16p and some gloves for 15p. She thinks she has enough money to buy both. Is she correct?