








Circle the coins that you could use to make the amounts.

17p	
23p	
12p	
42p	
35p	
27p	
39p	

Now can you challenge yourself a little and answer these questions?



I have 25p in silver coins.

Is Beth right? Yes No

What coins might she have?

Ash says he has 6p with 2 coins



Mo says he has 6p with 3 coins



What coins do they have?

Tick the one that is incorrect:

13p = 10p, 2p, 1p

15p = 10p, 5p

18p = 10p, 5p, 3p